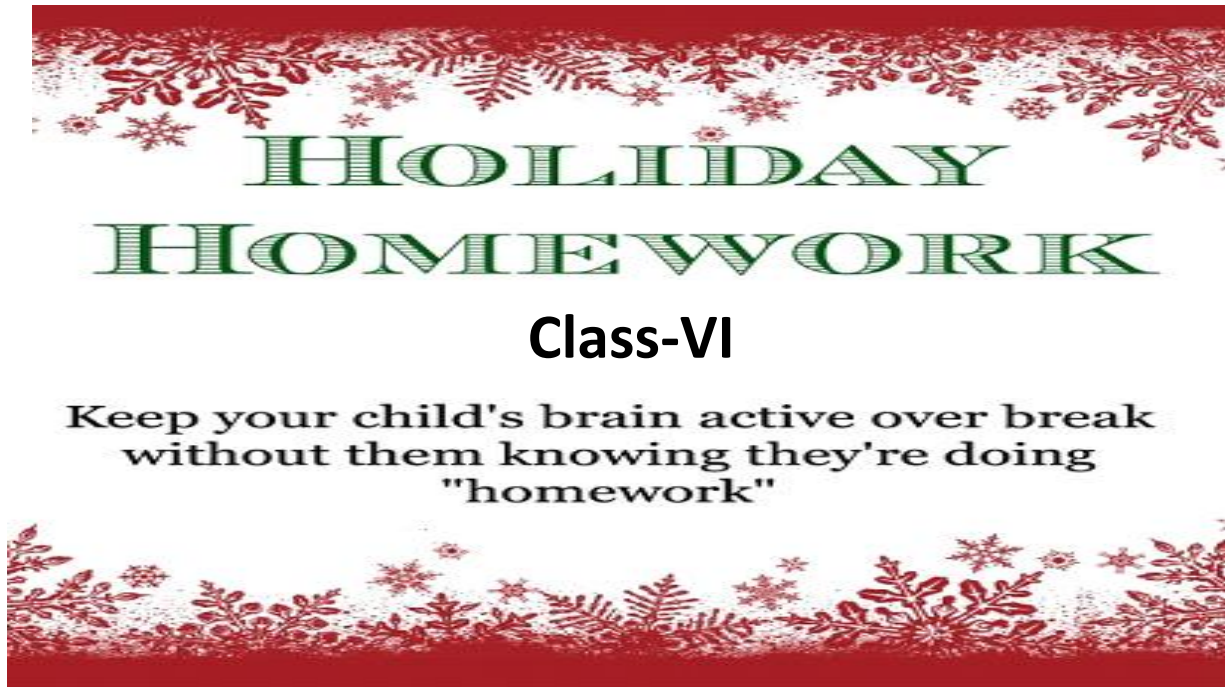


D.A.V INTERNATIONAL SCHOOL

SESSION – 2018-2019



it's summer time,
School vacation has begun,
Time for children to play,
And have fun in the sun,
Now the children are out of school,
There are trees to climb,
Swimming in the pool.
Time to spend with special friends
Seems they're on the go
Until the days end
But when summer vacation
Is finally through, It's time to hit the books And return to school

Dear parents

- Kindly ensure to share some tips to make this summer vacation a fruitful and happy period for young kids.
- Have at least two meals together with your children.
- Teach them to learn dignity of labour by letting them do their work by themselves.
- Encourage them to plant atleast one sapling this summer vacation and guide them to take good care of the same.

General instruction for students :

1. Read the instructions carefully before starting your assignments.
2. Your work must be very neat and clean . Highlight the headings of your assignments.
3. All files , scrapbooks, projects etc. should be well labelled with the Name , Class and Section of the student. It must be submitted to their respective teachers as per the given schedule.

Schedule of submission of Holidays Homework :

MATHS	9-7-18
ENGLISH	10-7-18
HINDI	11-7-18
SCI.	12-7-18
S.SCI.	13-7-18
PBI.	16-7-18

School reopens on 9th July 2018 .

School timings : 8:00 am - 2:00 pm

English

Read the following comprehension and answer the questions

1. The great advantage of early rising is the good start it gives us in our day's work. The early riser has done a large amount of hard work before other men have got out of bed. The work done at morning is generally well done. In many cases the early riser also finds time to take some exercise in the fresh morning air, and this exercise supplies him with a fund of energy that will last until the evening. By beginning so early, he knows that he has plenty of time to do thoroughly all the work he can be expected to do, and is not tempted to hurry over any part of it. All his work being finished in good time, he has a long interval of rest in the evening before the timely hour when he goes to bed. He gets to sleep several hours before midnight, at the time when sleep is most refreshing and after a sound night's rest, rises early next morning in good health and spirits for the labours of a new day.
2. It is very plain that such a life as this is far more conducive to health than that of the man who shortens his working hours by rising late, and so can afford in the course of the day little leisure for necessary rest. Any one who lies in bed late, must, if he wishes to do full day's work, go on working to a correspondingly late hour, and deny himself the hour or two of evening exercise that he ought to take for the benefit of his health. But, in spite of all his efforts, he will probably not produce as good results as the early riser, because he misses the best working hours of the day.
3. It may be objected to this that some find the perfect quiet of midnight by far the best time for working. This is no doubt true in certain cases. Several great thinkers have found by experience that their intellect is clearest, and they can write best, when they burn the midnight oil. But even in such cases the practice of working late at the night cannot be recommended. Few men, if any, can exert the full power of their intellect at the time when nature prescribes sleep, without ruining their health thereby; and of course the injury done to the health must in the long run have a bad effect on the quality of the work done.

Q1. How does a day get a good start ?

Q2. Why the work done early in the morning is well done ?

Q3. How does an early riser get energy to last him for the whole day ?

Q4. Mention any two disadvantages of late rising.

Q5. Why is the late working not really recommended ?

Q6. How is an early riser not tempted to hurry over any part of his work ?

Integrated exercise of Indefinite and Continuous Tense

1. He never _____(give) me a chance to speak.(Past Indefinite)
2. The verdict _____(go) against him.(Future Indefinite)
3. He _____(prepare) for the examination. (Future Continuous)
4. Silk _____(be) produced by a worm.(Present Indefinite)
5. He _____(drink) tea every morning.(Present Indefinite)

6. I _____(go) to Shimla tomorrow.(Future Continuous)
7. The plane _____(arrive) at 3:30.(Future Indefinite)
8. The next term _____(begin) on 16th August.(Present Continuous)
9. I _____(stay) here till Sunday.(Future Continuous)
10. We _____(listen) to radio all evening.(Past Continuous)

Notice Writing

1. Rahul of class VI has lost his watch in the school playground. He puts up a notice on the school notice board giving necessary details.
2. You are member of Kid's charity club. Your club is planning to distribute free books to the children of orphanage .Draft a notice for the students of ST.Mary school to raise funds for the same.

3. Creative Writing

- Write a paragraph by looking at given picture and underline the verbs in it. Make two columns – Regular and Irregular verbs and put the appropriate verb in the box.



Science

Make a working model on topic Environment OR

Prepare colourful attractive flash cards on topic states of matter.

Social Science

- Use A4 sheets to do the homework.
- Pay more attention on content.

Select a historical monument of India or the world .Draw or paste its picture on an A4 sheet. Write down a paragraph about it. Your information should include:-

- Location of the monument
- Period of the construction
- Material used
- Architectural design

Or (Refers to lesson 8)

There have been many social reformers who dedicated their lives for the betterment of the society.eg. Swami Dayanand Saraswati,Raja Ram Mohan Roy,Ishwar Chandra Vidyasagar etc. Collect information and write down a paragraph on any one of them.

(Refers to lesson 21)

Mathematics

1.BODMAS BANK BREAK In !

There has been a bank robbery! We must try to find the guilty party is luckily because he felt so guilty he has left some clues to help us. The first clue was that he is a famous footballer. Answer the questions below to get letters, the letters will spell out the clues!

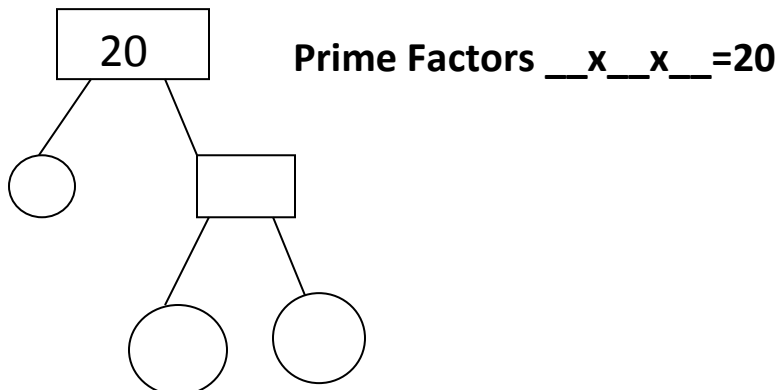
A	B	C	D	E	F	G	H	I	J
3	12	20	11	1	14	9	25	4	16
K	L	M	N	O	P	Q	R	S	T
6	5	24	2	17	27	13	19	26	22
U	V	W	X	Y	Z				
23	13	7	21	8	18				

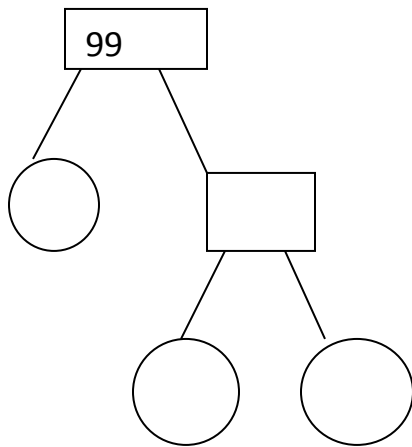
1.Clue:-

(a) $(3+3) \times 4$ (b) $(4 \times 2) - 5$ (c) $(5+7) \div 6$ (d) $5 \times 3 + 5$ (e) $(9-4) \times 5$

(f) $1+1-1$ (g) $2 \times (15-2)$ (h) $(5 \times 4) + 2$ (i) $(8+2) \div 10$ (j) $(21 \times 1) - 2$

2. Find the prime factors of the numbers :-





Prime Factors $__ \times __ \times __ = 99$

3) List all the prime numbers between 1 -100

4) Use divisibility tests

i) 6525 by 2 ii) 70335 by 3 and 9

5) Find the product by distributive property

a) 587×103 b) 728×97

6) What least number must be added to 4178 to make it exactly divisible by 35

7) Divide and check your answer

A) $1675 \div 25$ B) $4130 \div 15$

8) Estimate the product 3178×596

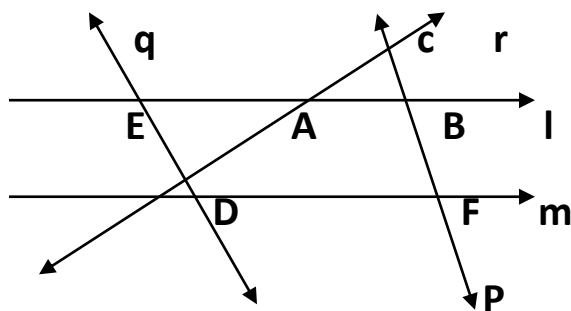
9) Find the greatest 4 digit number divisible by 40

10) Find the difference between greatest 5 digit number and smallest 4 digit number

Topic-Basic Geometrical Concepts

11) Draw and define Incidence properties of point and line.

12)



In the above figure, name

1) All the pairs of parallel lines

2) Collinear points

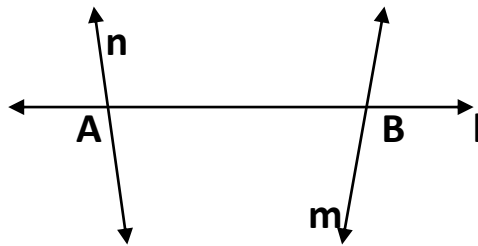
3) 2 Pairs of intersecting lines

4) Point of concurrence of lines

13) With the help of a figure, find the maximum and minimum number of points of intersection of

a) Four lines in a plane

13) In given figure name -

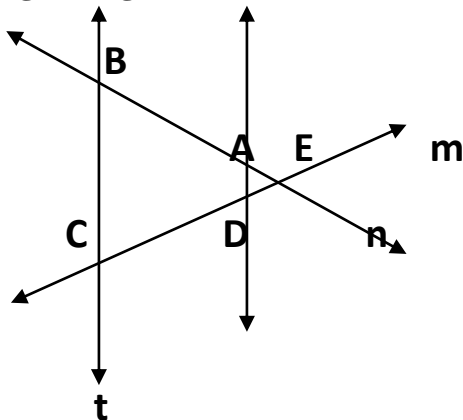


i) All the points on line (n)

ii) All points on line(l)

iii) Lines passing through point (B)

14) In given figure name-



i) All the pairs of parallel lines ii) 2 pairs of intersecting lines

ii) One set of 3 collinear points iii) Lines whose points of intersection is B

v) All sets of collinear points

1. ਮੁਹਾਵਰੇ (1-15)
2. ਸਮਾਨਰਾਥਕ ਸ਼ਬਦ (ਉਪਰਾ ਤੋ ਅਜੀਬ) ਪੰਨਾ . 80
3. ਅਗੇਤਰ ਉਪ ਤੋਂ ਸਵੈ ਪੰਨਾ 72
4. ਲੇਖ:- (ੳ) ਵਿਸਾਖੀ ਦਾ ਮੇਲਾ (ਅ) ਸੁਤੰਤਰਤਾ ਦਿਵਸ

ਗ੍ਰੀਯਮਾਕਾਸ਼ ਕਾਰਯ

ਪਾਠ - 4, 6

ਨਿਮਨਲਿਖਿਤ ਪ੍ਰਸ਼ਨੋਂ ਕੇ ਉਤਰ ਲਿਖੋ:-

1. ਸਤਯਪਾਲ ਕੌਨ ਸੀ ਕਖ਼ਾ ਮੋਂ ਪਫ਼ੁਰਤਾ ਥਾ?
2. ਸਤਯਪਾਲ ਕੇ ਲਿਏ ਫ਼ੀ ਵਿਸ਼ੇਸ਼ਣ ਸ਼ਬਦ ਛਾੱਟ ਕਰ ਲਿਖੋ?
3. ਸਤਯਪਾਲ ਕਯਾ ਬੇਚਤਾ ਥਾ ਔਰ ਕਯੋਂ?
4. ਸਤਯਪਾਲ ਮੋਂ ਆਪਕੋ ਕਯਾ-ਕਯਾ ਗੁਣ ਨਯਰ ਆਏ?
5. ਸਤਯਪਾਲ ਕਿਸ ਸਮਯ ਅਖ਼ਬਾਰ ਬੇਚਤਾ ਥਾ?
6. ਰਾਮਨਗਰ ਕੈਸਾ ਸ਼ਹਰ ਥਾ?
7. ਉਸ ਵਰ੍ਸ਼ ਪ੍ਰਤਿਯੋਗਿਤਾ ਕਾ ਵਿਸ਼ਯ ਕਯਾ ਥਾ?
8. 'ਪੁਰਸਕਾਰ' ਪਾਠ ਕੇ ਰਚਨਾਕਾਰ ਕਾ ਨਾਮ ਬਤਾਔਓ
9. ਪਾਠ ਮੋਂ ਸੇ ਕੋਏ ਫ਼ੀ -ਫ਼ੀ ਅਨੁਸਵਾਰ ਔਰ ਅਨੁਨਾਸਿਕ ਸ਼ਬਦ ਲਿਖੋ?
10. ਭਾਏ! ਤੁਮ ਤੋ ਬਹੁਤ ਜਲਫ਼ੀ ਨਿਪਟ ਗਏ। ਯਹ ਵਾਕਯ ਕਿਸਨੇ ਕਿਸਸੇ ਕਹਾ ਥਾ?
11. ਏਕ ਫ਼ਿਨ ਸਤਯਪਾਲ ਕੀ ਅਖ਼ਬਾਰੋਂ ਕਯੋਂ ਨਹੀਂ ਬਿਕੀ
12. ਸ਼ਿਸ਼ਕ ਨੇ ਸਤਯਪਾਲ ਕੀ ਪੀਠ ਠੀਕ ਕਰ ਕਯਾ ਕਹਾ?
13. 'ਅਨੋਖਾ ਵਰਫ਼ਾਨ' ਪਾਠ ਕੇ ਰਾਜਾ ਕਾ ਨਾਮ ਬਤਾਔਓ?
14. ਡਾਕੂਔੋਂ ਨੇ ਰਾਜਾ ਪਰ ਹਮਲਾ ਕਯੋਂ ਕ੍ਰਿਯਾ?
15. ਰਾਜਾ ਡਾਕੂਔੋਂ ਕੇ ਘੇਰੇ ਸੇ ਕਯੋਂ ਨਹੀਂ ਭਾਗ ਪਾਯਾ?
16. ਪਹਲੇ ਨੌਜਵਾਨ ਨੇ ਰਾਜਾ ਸੇ ਕਯਾ ਮਾਂਗਾ?
17. ਚੌਥੇ ਨੌਜਵਾਨ ਨੇ ਰਾਜਾ ਸੇ ਕਯਾ ਮਾਂਗਾ?
18. ਰਾਜਾ ਅਪਨੀ ਪ੍ਰਜਾ ਕਾ ਹਾਲ ਜਾਨਨੇ ਕੇ ਲਿਏ ਕਯਾ ਕਰਤਾ ਥਾ?
19. ਛਠੇ ਨੌਜਵਾਨ ਕਯਾ ਵਰਫ਼ਾਨ ਮਾਂਗ ਔਰ ਸਬ ਕੁਛ ਕੈਸੇ ਪਾ ਲਿਯਾ?
20. ਰਾਜਾ ਕੇ ਪੀਛੇ ਭੇਸ ਬਦਲ ਕਰ ਕੌਨ ਚਲਤੇ ਥੇ?
21. ਰਾਜਾ ਕੋ ਛਠੇ ਨੌਜਵਾਨ ਕੋ ਰਾਜਫ਼ਰਬਾਰੀ ਕੀ ਪਫ਼ੁਰੀ ਕਯੋਂ ਫ਼ੇਨੀ ਪਫ਼ੀ?

22. पाठ के आधार उचित विशेषण शब्द लिखें

1 _____ भवन

2 _____ नौजवान

3 _____ पत्नी

4 _____ कपड़े

❖ अभ्यास सागर के पृष्ठ 18, 25, 32, 38, 48 करे

❖ खोई चार अपठित गद्यांश सुलेख रूप में लिखे और उसी में से प्रश्न बनाकर उनके उत्तर भी दे